


11+ CEM Maths Practice Assessment Tests: Your Ultimate Guide to 11+ Success

: Why is CEM 11+ Maths Assessment Important?

The CEM 11+ is a highly competitive exam that plays a crucial role in determining a child's admission to top grammar schools in the UK. The CEM 11+ Maths assessment is a particularly challenging component of the exam, requiring advanced problem-solving skills, reasoning ability, and a thorough understanding of mathematical concepts.

To excel in this assessment, students need to be well-prepared with a combination of in-depth knowledge and ample practice. Our comprehensive 11+ CEM Maths Practice Assessment Tests Ages 10 is meticulously designed to equip your child with all the essential tools and techniques needed to conquer the CEM 11+ Maths challenge.



11+ CEM Maths Practice Book & Assessment Tests - Ages 9-10 : unbeatable eleven plus preparation from the exam experts (CGP 11+ CEM) by CGP Books

★★★★☆ 4.6 out of 5

Language : English

File size : 9023 KB

Print length : 92 pages

Screen Reader : Supported



Key Features of Our 11+ CEM Maths Practice Assessment Tests

- **11 Full-Length Practice Tests:** Our book provides a total of 11 full-length practice tests that mirror the actual CEM 11+ exam structure and difficulty level. These tests allow students to simulate the real exam experience and identify areas for improvement.
- **Expert Tips and Strategies:** Throughout the book, we share invaluable expert tips and strategies that guide students on how to approach different types of questions effectively. These tips cover everything from time management to question-specific techniques, giving students a competitive edge.
- **In-Depth Explanations:** Our comprehensive answer key provides detailed explanations for every question, ensuring that students understand not only the correct answers but also the underlying concepts. This approach promotes deep learning and strengthens problem-solving abilities.
- **Rigorous Practice Questions:** Our practice questions cover a wide range of topics, including number, algebra, geometry, statistics, and problem-solving. Each question is carefully crafted to challenge students and develop their mathematical prowess.
- **Progress Tracking System:** We provide a convenient progress tracking system that enables students to monitor their performance, identify areas for improvement, and stay motivated throughout their preparation journey.

Benefits of Using Our 11+ CEM Maths Practice Assessment Tests

- **Enhanced Confidence:** By providing ample practice and detailed explanations, our book boosts students' confidence in their mathematical abilities and reduces exam anxiety.

- **Improved Time Management Skills:** Through timed practice tests, students learn to manage their time effectively, ensuring they complete each section within the allocated time frame.
- **Targeted Revision:** The progress tracking system helps students identify areas that require additional revision, allowing them to focus their efforts on specific topics.
- **Exceptional Exam Preparation:** The 11 full-length practice tests provide invaluable experience and prepare students for the actual CEM 11+ Maths assessment, boosting their chances of success.
- **Enhanced Mathematical Abilities:** Our practice questions and expert tips foster a deep understanding of mathematical concepts and develop advanced problem-solving skills that extend beyond the exam.

Sample Questions and Explanations

Question: A farmer has 120 sheep and 75 cows. He sells half of his sheep and one-third of his cows. How many animals does he have left?

Expert Tip: Start by calculating the number of sheep and cows the farmer sells. Then, subtract these values from the original number of animals to determine the number of animals left.

Explanation: The farmer sells half of his sheep, which is $120 \div 2 = 60$ sheep. He also sells one-third of his cows, which is $75 \div 3 = 25$ cows. Therefore, he sells a total of $60 + 25 = 85$ animals. Subtracting this value from the original number of animals, $120 + 75 = 195$, gives us the number of animals left: $195 - 85 = 110$ animals.

Who Should Use Our 11+ CEM Maths Practice Assessment Tests?

Our 11+ CEM Maths Practice Assessment Tests are designed for children aged 10 who are preparing for the CEM 11+ Maths assessment. Whether they are currently in Year 5 or Year 6, this book is an essential resource for students who aspire to excel in this crucial exam.

Parents and educators can also use this book to support and guide students throughout their preparation journey. By providing timed practice tests and detailed explanations, they can monitor students' progress and identify areas for improvement.

: The Ultimate 11+ CEM Maths Practice Resource

Our 11+ CEM Maths Practice Assessment Tests Ages 10 is the most comprehensive and effective resource available to prepare students for the CEM 11+ Maths assessment. With 11 full-length practice tests, expert tips, in-depth explanations, and a progress tracking system, this book empowers students with the knowledge, skills, and confidence they need to achieve 11+ success.


By investing in our 11+ CEM Maths Practice Assessment Tests, you are giving your child the best possible opportunity to excel in the CEM 11+ Maths assessment and secure a place at their dream grammar school.

About the Author: Your Trusted 11+ Expert

Our team of experienced educators and CEM 11+ specialists has carefully crafted these practice tests to provide students with the most accurate and up-to-date preparation materials. With years of experience in teaching and assessing CEM 11+ Maths, our team understands the key concepts, question types, and strategies that students need to master for exam success.

Free Download Your Copy Today and Unlock the Path to 11+ Success

Don't wait! Free Download your copy of 11+ CEM Maths Practice Assessment Tests Ages 10 today and give your child the competitive edge they need to excel in the CEM 11+ Maths assessment. With our comprehensive practice tests and expert guidance, your child will be fully prepared to conquer the challenges of the CEM 11+ and secure their place at their desired grammar school.



11+ CEM Maths Practice Book & Assessment Tests - Ages 9-10 : unbeatable eleven plus preparation from the exam experts (CGP 11+ CEM) by CGP Books


★★★★☆ 4.6 out of 5

Language : English

File size : 9023 KB

Print length : 92 pages

Screen Reader : Supported



The Life and Legacy of Voltaire: A Monumental Exploration of an Intellectual Titan

Enlightenment Champion and Master of the Pen François-Marie Arouet, better known by his pen name Voltaire, emerged as a towering...



The Captain Quest: A Captivating Saga of Adventure, Discovery, and Unwavering Courage

Prepare to embark on an extraordinary odyssey with "The Captain Quest," a captivating novel by the renowned author Christopher Lee Philips. This epic...